

SpellIndia

INDIA's **1**
No.

SPELLING BEE

Preparatory Study Material
Provider

www.phonicstore.com

ICSE ACADEMY
www.spellbeeacademy.com



Past Year Papers

PREPARE

for

ICSE

Class 10

Home Science



ICSE ACADEMY: How to Prepare for ICSE Class 10 exams

<https://www.spellbeeacademy.com/icse.html>



How to Prepare for ICSE Class 10 exams : Free Resources

Please click on subject to proceed further.

We will keep adding resources here till "March 2026".

So, save this link, keep visiting and stay updated.

(Resources include : Syllabus, Past Year Papers, Specimen Papers, Competency based Questions, Books pdf downloadable, 350+ Term Papers / Prelim Papers of various schools - across subjects, etc.)

01 English Literature

02 English Language

03 Geography

04 History & Civics

05 Physics

06 Chemistry

07 Mathematics

08 Biology

09 Computer Applications

10 Physical Education

11 Hindi

12 Commercial Studies

13 Economics

14 Technical Drawing

15 Environmental Science

16 Home Science

17 Gujarati

18 Marathi

19 French



SCAN QR code to buy the book at amazon NOW.

SpellIndia
INDIA's No. 1 SPELLING BEE
Preparatory Study Material Provider
www.spellindia.com

ICSE ACADEMY
www.spellbeeacademy.com

Pati's

PREPARE
for
ICSE
Classes 9 & 10
ENGLISH GRAMMAR
(Includes : Board, Specimen Papers of 6 years & Competency-focused questions)

28 YEARS Past Questions

75 Practice TESTS

Debashis Pati
Author is the 1st individual to write preparatory books on various topics of 'multiple' Spelling Bee competitions in India. He has written the Maximum Number of Spelling Books as well as Tests in the world.

Authoring to board exams 2024-2027 exams

ing / Vocabulary / Grammar Olympiad Exam conductor.



SpellIndia
INDIA's No. 1 SPELLING BEE
Preparatory Study Material Provider
www.spellindia.com

ICSE ACADEMY
www.spellbeeacademy.com

Pati's

PREPARE
for
ICSE
Class 10
(Acts 3 to 5 only)
Julius Caesar

1000+ Practice QUESTIONS*

30 Practice TESTS
(*Practise based questions of 30 extracts)

Past Years' Questions (13 years: 1990 onwards)
Competency focused Questions (1 year)
Multiple choice Questions (850+ nos*)
Extract based Questions (65+ extracts*)
*Includes the questions of last 13 past years' questions and the 30 tests.

Debashis Pati
Author is the 1st individual to write preparatory books on various topics of 'multiple' Spelling Bee competitions in India. He has written the Maximum Number of Spelling Books as well as Tests in the world.

Authoring to board exams 2024-2027 exams

ing / Vocabulary / Grammar Olympiad Exam conductor.



SpellIndia
INDIA's No. 1 SPELLING BEE
Preparatory Study Material Provider
www.spellindia.com

ICSE ACADEMY
www.spellbeeacademy.com

Pati's

PREPARE
for
ICSE
Class 10
HINDI GRAMMAR
350+ Sample practice questions & # 51 Tests

350+ SAMPLE QUESTIONS

51 TEST PAPERS

तामसी पति
Tamasee Pati

Authoring to board exams 2025 / 2026 onwards



SpellIndia
INDIA's No. 1 SPELLING BEE
Preparatory Study Material Provider
www.spellindia.com

ICSE ACADEMY
www.spellbeeacademy.com

Pati's

PREPARE
for
ICSE
Class 10
CIVICS
The TESTS are based on the Prelim / Pre-board papers of various schools. Answers are provided for all.
Competency Based Questions and 3 Specimen Papers are provided.

40 TEST PAPERS





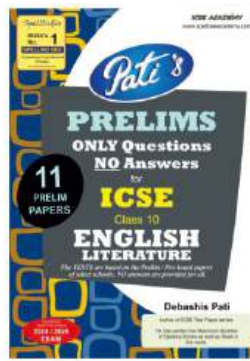

Debashis Pati
Author of ICSE Test Paper series.

Authoring to board exams 2024 / 2025 EXAM

Author is the Maximum Number of Spelling Books as well as Tests in the world.




Scan QR code for Free Access to 500+ Prelim Papers across 20 subjects



Prepare for ICSE CLASS 10 Home Science

Free Resources

SCAN QR CODE Now





ICSE ACADEMY

Past Year Papers

- 2025

- 2024

- 2023

HOME SCIENCE

Maximum Marks: 100

Time allowed: Two hours

1. Answers to this Paper must be written on the paper provided separately.
2. You will **not** be allowed to write during the first 15 minutes.
3. This time is to be spent in reading the question paper.
4. The time given at the head of this Paper is the time allowed for writing the answers.
5. Attempt **all** questions from **Section A** and **any four** questions from **Section B**.
6. The intended marks for questions or parts of questions are given in brackets [].

Instruction for the Supervising Examiner

Kindly read aloud the Instructions given above to all the candidates present in the Examination Hall.

This paper consists of 12 printed pages.

T25 681 I

© Copyright reserved.

Turn Over

SECTION A (40 Marks)

(Attempt all questions from this Section.)

Question 1

[20]

Choose the correct answers to the questions from the given options.

(Do not copy the questions, write the correct answers only.)

(i) Rajni bought extra products while purchasing groceries for the month and realised that she had overspent. Identify the type of budget.

- (a) Deficit budget
- (b) Surplus budget
- (c) Balanced budget
- (d) Regular budget

(ii) Modular kitchens are _____ and _____.

1. Space efficient	3. Cost-efficient
2. Maintenance free	4. Flexible

- (a) 1 and 2
- (b) 2 and 3
- (c) 3 and 4
- (d) 1 and 4

(iii) **Statement I:** Balanced diet is important for all age groups.

Statement II: A balanced diet enhances immunity and promotes good health.

- (a) Statement I is true and Statement II is false.
- (b) Statement I is false and Statement II is true.
- (c) Both Statements I and II are true.
- (d) Both Statements I and II are false.

- (iv) Identify the type of development depicted in the given picture:



- (a) Emotional development
(b) Physical development
(c) Social development
(d) Cognitive development
- (v) Rahul's teacher complained to his parents about his bullying nature. Which of the following traits are seen in Rahul?
- (a) Shy, sensitive and passive
(b) Anxious and unhappy
(c) Physically weak
(d) Breaks rules
- (vi) Pick the odd pair out.
- (a) *Aapki Beti Hamari Beti* – Protection of the girl child
(b) PMJDY – Providing income generating assets
(c) PM-JAY – Health Insurance Scheme
(d) POCSO Act – Prevention of sexual offences

- (vii) Rashmi has washed her woollen sweater and wants to store it. Identify the most suitable finishing method that Rashmi should adopt.



- (a) Pressing
(b) Ironing
(c) Steaming
(d) Calendaring
- (viii) **Assertion (A):** Readymade clothes are convenient.
Reason (R): They save time and effort in tailoring allowing consumers to do last minute purchase.
- (a) (A) is true but (R) is false.
(b) (A) is false but (R) is true.
(c) Both (A) and (R) are true and (R) is the correct explanation of (A).
(d) Both (A) and (R) are true and (R) is not the correct explanation of (A).
- (ix) **Assertion (A):** Foods rich in proteins and fats have a higher satiety value.
Reason (R): A meal must keep you full for 3 – 4 hours.
- (a) (A) is true but (R) is false.
(b) (A) is false but (R) is true.
(c) Both (A) and (R) are true and (R) is the correct explanation of (A).
(d) Both (A) and (R) are true and (R) is not the correct explanation of (A).

- (x) Identify the type of floor covering given in the image.



- (a) Area rug
(b) Wall to wall carpet
(c) Scatter rug
(d) Runner
- (xi) Choose the correct pair based on the principles of meal planning.
- | | |
|---------------------------------|------------------------------|
| A. Low budget | 1. Enhances nutritive value |
| B. Knowledge of cooking methods | 2. Prevents spoilage of food |
| C. Sprouting | 3. Alternate sources of food |
| D. Proper storage | 4. Retains maximum nutrients |
- (a) A-2, B-4, C-1, D-3
(b) A-4, B-3, C-2, D-1
(c) A-3, B-2, C-2, D-4
(d) A-3, B-4, C-1, D-2

(xii) Choose the appropriate characteristics of the child depicted in the picture.



1. Loses focus of tasks very easily
2. Likes doing quiet activities
3. Is able to follow instructions
4. Displays excessive amount of activity

- (a) Only 1
- (b) Both 1 and 4
- (c) Both 2 and 3
- (d) Only 4

(xiii) Fruits and vegetables that have red or purple colour should be preserved by the use of sodium benzoate.

- (a) True
- (b) False

(xiv) Seema bought canned fruits and vegetables to take along with her for her hiking trip as they have a long shelf life. The process used in canning for longer preservation of foods is:

- (a) Radiation
- (b) Carbonation
- (c) Sterilisation
- (d) Pasteurisation

- (xv) Brochures are concise and visually appealing documents. Identify the appropriate feature of a brochure.
- (a) They are inexpensive
 - (b) They are usually designed in a threefold format
 - (c) They can be inserted in newspapers
 - (d) They are used for advertising vacancies.
- (xvi) Carbon footprint relates to the amount of greenhouse gases produced in our day-to-day lives. _____ is an example of Primary Carbon Footprint.
- (a) Ready meals
 - (b) Drinking only bottled water
 - (c) Home appliances permanently switched on
 - (d) Eating large quantities of red meat
- (xvii) Growth is:
- (a) related to heredity
 - (b) a qualitative change
 - (c) continuous
 - (d) related to the environment
- (xviii) As a part of their Home Science practical, a group of students visited a soap factory where they observed the process of manufacturing soaps. The process of making soaps is called:
- (a) Esterification
 - (b) Distillation
 - (c) Carbonation
 - (d) Saponification

(xix) Susanne wanted to purchase good quality clothes which ensures good serviceability. The quality that Susanne was looking for in the clothes was _____.

- (a) The colour fastness of a fabric
- (b) The maintenance required for a fabric
- (c) The durability of the fabric
- (d) The stretchability of a fabric

(xx) Mr. Kumar is planning to construct a new house. The two main factors that Mr. Kumar has to consider while planning the size of the kitchen in his house are:

1. The available space in the house plan.
 2. The materials used in the kitchen.
 3. The number of persons for whom the food has to be cooked.
 4. The ventilation in the kitchen.
- (a) Only 1
 - (b) Only 2
 - (c) Both 1 and 3
 - (d) Both 2 and 4

Question 2

Answer all the questions:

- (i) Mr. Varghese is going to retire soon and wants to invest his money. Mention [2]
two agencies in which he can invest his money.

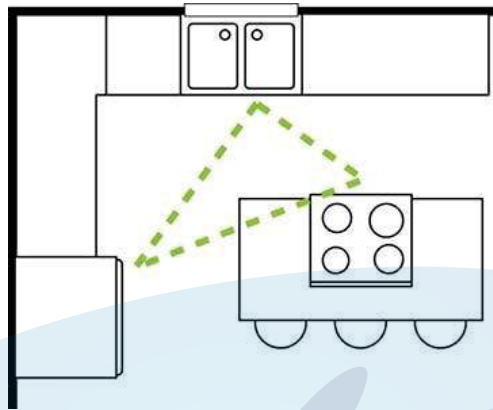
- (ii) Mrs. Zainab wants to have an open kitchen in her newly constructed house. [2]
Give *any two* reasons why she does not want to have doors for her kitchen.
- (iii) Mrs. Neena recently moved into a rented house which had a low ceiling. [2]
Mention the pattern of curtains and draperies that Mrs. Neena should choose to hide the architectural defect.
- (iv) Define emotional development. [2]
- (v) Madhu prefers to buy nuts in small quantities. What could be the two reasons [2]
for her preference?
- (vi) Sudha went to the market to purchase green leafy vegetables. What two factors [2]
should Sudha take into consideration while purchasing green leafy vegetables.
- (vii) Shobha prefers to eat a variety of fruits instead of drinking bottled fruit juices. [2]
State *any two* reasons for Shobha's preference.
- (viii) Name any two causes of environmental degradation that is disrupting our [2]
ecosystem.
- (ix) List *any two* eligibility criteria of PMJDY. [2]
- (x) Give *two* suggestions for parents and teachers for improving communication [2]
skills with children.

SECTION B (60 Marks)
(Answer *any four* questions from this *Section*.)

Question 3

- (i) A newly married couple would like to design their living room with an [5]
appropriate choice of furnishing. Discuss *any five* factors that the couple have
to keep in mind while purchasing furnishing for their room.

- (ii) Mr. Sharma wants to prepare a family budget. Suggest *any five* factors that Mr. Sharma should consider while planning the family budget. [5]
- (iii) Observe the diagram given below and answer the questions that follow: [5]



- (a) Name the imaginary line which connects the work centers of the kitchen.
- (b) State *two* criteria to be kept in mind while designing this imaginary line.
- (c) List *two* precautionary measures to be taken to make your kitchen flooring safe and secure.

Question 4

- (i) “*Early intervention by parents, teachers and professionals helps the child to develop skills.*” List out *any five* signs of learning disability that parents and teachers can recognise in high school children. [5]
- (ii) Discuss the role of parents in being sensitive towards children with learning disability. [5]
- (iii) Explain how peer groups can have positive influence in a child’s behaviour. [5]

Question 5

- (i) A balanced diet plays an important role in ensuring comprehensive nutrition. [5]
With respect to this, give the nutritional contribution of the five food groups.
- (ii) State *any five* disadvantages of convenience food. [5]
- (iii) Meenakshi purchased fruits for her family and kept it in the fruit bowl. After two days she observed that the fruits were spoilt. State *any five* reasons for the spoilage of fruits. [5]

Question 6

- (i) Sheela's blue synthetic dupatta was dirty. Discuss the steps that Sheela has to follow during the laundry process. [5]
- (ii) Rajani wants to purchase a good laundry soap to wash her clothes. Mention *any four* characteristics that she should look for while purchasing the laundry soap. Name a natural cleaning agent other than the soap. [5]
- (iii) Sunitha starches her cotton sarees frequently to make it look better. List any five benefits of starching cotton clothes to make it look better. [5]

Question 7

Write short notes on the following:

- (i) Uses of communication aids [5]
- (ii) Gender discrimination [5]
- (iii) Selection of carpets [5]

Question 8

(i) State *any five* features of MNREGA. [5]

(ii) *India is now the world's most populous nation and it is still growing. Population explosion has constituted a threat to humanity and development.* [5]

— *www.npr.org, 8/6/2023*

(a) What do you mean by population explosion?

(b) State *any two* causes of population explosion.

(c) List *any two* problems related to population explosion the world is facing today.

(iii) Your school is organising a carnival to raise funds for an orphanage. You have been entrusted with the task of designing a pamphlet. Identify *any five* key elements that you will implement in making an effective pamphlet. [5]

HOME SCIENCE

Maximum Marks: 100

Time allowed: Two hours

1. *Answers to this Paper must be written on the paper provided separately.*
2. *You will **not** be allowed to write during the first 15 minutes.*
3. *This time is to be spent in reading the question paper.*
4. *The time given at the head of this Paper is the time allowed for writing the answers.*
5. *Attempt **all** questions from **Section A** and **any four** questions from **Section B**.*
6. *The intended marks for questions or parts of questions are given in brackets [].*

Instruction for the Supervising Examiner

Kindly read aloud the Instructions given above to all the candidates present in the Examination Hall.

This paper consists of 12 printed pages.

T25 681

© Copyright reserved.

Turn Over

SECTION A (40 Marks)

(Attempt *all* questions from this *Section*.)

Question 1

[20]

Choose the correct answers to the questions from the given options.

(Do not copy the questions, write only the correct answers.)

- (i) Mr. Kumar has recently retired and wants to get good returns from his savings. Identify the agency in which he can invest his savings:
- (a) Post office
 - (b) The Provident Fund
 - (c) Gratuity
 - (d) The Pension Scheme
- (ii) Observe the picture and identify the specific learning disability the child is suffering from.



- (a) ADHD
- (b) Dysgraphia
- (c) Dyscalculia
- (d) Dyslexia

- (iii) Renu's room has light coloured walls. She chooses a plain carpet to match the colour of the walls to bring out _____ and _____.

1. Continuity	3. Richness
2. Spaciousness	4. Contrast

Choose the appropriate combination of words to fill in the blanks.

- (a) 1 and 2
(b) 3 and 4
(c) 2 and 3
(d) 1 and 4
- (iv) Bottled fruit juices do not deteriorate easily as they have a high percentage of:

- (a) Spices
(b) Salt
(c) Herbs
(d) Sugar

- (v) **Statement I:** Sex ratio is well balanced in our country.

Statement II: The preference for a male child is still prevalent in our society.

- (a) Statement I is true and Statement II is false.
(b) Statement I and II are true.
(c) Statement I is false and Statement II is true.
(d) Statement I and II are false.

(vi) **Assertion (A):** Lifestyle diseases have become very common in today's world.

Reason (R): Faulty eating habits, obesity, diabetes and other associated disorders have contributed to lifestyle diseases.

- (a) (A) is false and (R) is true.
- (b) (A) is true and (R) is false.
- (c) Both (A) and (R) are true and (R) is the correct reason of (A).
- (d) Both (A) and (R) are true and (R) is not the correct reason of (A).

(vii) Identify the type of fabric which should preferably be washed using the method depicted in the picture.



- (a) Cotton
- (b) Linen
- (c) Silk
- (d) Jute

(viii) Peer group serves as a role model to reinforce positive behaviour during gang age.

- (a) True
- (b) False

- (ix) Choose the relevant statement with reference to the milk and milk products shown below:



- (a) They should be consumed occasionally.
(b) They are important sources of fibre.
(c) They are appropriate for all age groups.
(d) They belong to superfluous food group.
- (x) Rita's mother prepares *papads* during summer. Choose the appropriate technique used by Rita's mother:
- (a) Dehydration
(b) Pickling
(c) Sprouting
(d) Roasting
- (xi) Identify the odd pair:
- (a) Perishable food – semolina and wheat flour
(b) Semi-perishable food – onion and garlic
(c) Non-perishable food – honey and sugar
(d) Convenience food – burger and pizza

- (xii) Choose the correct pairs based on the clothing preference of different age groups.
- | | |
|---------------|--|
| A. Men | 1. Delicate and attractive clothes |
| B. Women | 2. Soft and pastel shades |
| C. Youngsters | 3. Clothes with checks or striped patterns |
| D. Infants | 4. Vibrant and trendy clothes |
- (a) A-2, B-1, C-4, D-3
(b) A-4, B-3, C-2, D-1
(c) A-1, B-3, C-2, D-4
(d) A-3, B-1, C-4, D-2
- (xiii) A group of friends went camping. They carried a sleeping bag made of synthetic material. Identify the appropriate reason why they chose a sleeping bag made of synthetic material.
- (a) It is wrinkle free
(b) It is water resistant
(c) It is heavy
(d) It is delicate
- (xiv) The colourless dyes which make white fabric appear whiter and brighter are called _____.
- (a) Starches
(b) Blues
(c) Optical brighteners
(d) Detergents

(xv) Identify the type of exploitation depicted in the picture:



- (a) Child labour
- (b) Gender discrimination
- (c) Female infanticide
- (d) Child trafficking

(xvi) Sheetal is designing a kitchen for her new flat. Identify the appropriate features she should look for while selecting a material for the work counter.

1. Resistant to acid stains	3. Fade resistant
2. Heat resistant	4. Porous material

- (a) 1 and 4
- (b) 2 and 3
- (c) 1 and 2
- (d) 3 and 4

- (xvii) **Assertion (A):** The Government has taken many initiatives to uplift the people of our country.
- Reason (R):** PMJDY is a government scheme which aims to guarantee the right to work.
- (a) (A) is true and (R) is false.
- (b) (A) is false and (R) is true.
- (c) Both (A) and (R) are true and (R) is the correct reason of (A).
- (d) Both (A) and (R) are true and (R) is not the correct reason of (A).
- (xviii) A group of Home Science students visited a play school as a part of their practical work. They observed the teacher enacting a story to the students. Choose the appropriate communication aid used by the teacher.
- (a) Street play
- (b) Brochure
- (c) Puppets
- (d) Flyer
- (xix) Rohan's mother makes him solve puzzles regularly to improve his _____ development.
- (a) Emotional
- (b) Cognitive
- (c) Social
- (d) Physical

- (xx) Bedsheets used in hotels and hospitals must be boiled to _____ them.
- (a) Disinfect
 - (b) Brighten
 - (c) Soften
 - (d) Stiffen

Question 2

Answer all the questions:

- (i) *A careful planning of a family budget helps us to achieve long term goals.* [2]
Give *two* reasons for planning a realistic budget.
- (ii) *Proper ventilation is one of the major criteria while planning a kitchen.* [2]
List *any two* ways to ensure proper ventilation in the kitchen.
- (iii) List *any two* factors affecting the physical development of a child. [2]
- (iv) Yash's parents take a lot of interest and are responsive towards him. They encourage him to be independent but set balanced boundaries. Identify the type of parenting and write *one* advantage of this method of parenting. [2]
- (v) Sudha wore a red dress for her birthday. She needs to wash it before storing it. [2]
Suggest *any two* precautionary measures that she must take while laundering her dress.
- (vi) *"Good knowledge of seasonal fruits and vegetables is essential for meal planning."* Justify the statement. [2]
- (vii) Ravi consulted a doctor regarding his weight management. The doctor advised [2]
Ravi not to include white sugar, aerated drinks and desserts in his diet. Give *two* reasons for the doctor's advice.

- (viii) Manish opened a boutique in his area. Suggest *any two* appropriate communication aids for Manish to advertise his new boutique so that he can get more customers. [2]
- (ix) Name *any two* government schemes which aim to protect the girl child. [2]
- (x) Neeta plans to go abroad for further studies and needs to purchase appropriate clothing. Which *two* factors should she consider while purchasing readymade garments for herself? [2]

SECTION B (60 Marks)

(Answer *any four* questions from this *Section*.)

Question 3

- (i) Radha lives in a nuclear family and has a habit of spending lavishly. Suggest *any five* reasons why Radha should start saving for the future. [5]
- (ii) Observe the picture given below and answer the questions that follow: [5]



- (a) Identify the type of carpet shown in the picture above.
- (b) List *one* advantage and *one* disadvantage of the type of carpet identified by you in (a) above.
- (c) Suggest *any two* ways of taking care of carpets.
- (iii) State *any five* characteristics of an ideal kitchen. [5]

Question 4

- (i) Discuss the various cognitive skills observed during gang age. [5]
- (ii) *Schools play an important role in shaping the students as the future citizens of the country.* Justify the statement. [5]
- (iii) Mohan avoids reading tasks because he struggles to comprehend words and sentences in his textbooks. Identify the learning disability and mention *any four* signs of this learning disability. [5]

Question 5

- (i) A balanced diet helps one to lead a long and healthy life. Mention *any five* reasons why a balanced diet is important. [5]
- (ii) *Prior meal planning saves time, money, energy and fuel.* Justify the statement. [5]
- (iii) Mrs. Sheela bought many perishable food items which need to be stored for a period of time. Suggest *any five* precautionary measures that she should take while storing these perishable food items. [5]

Question 6

- (i) Enumerate *any five* steps to follow for laundering a silk scarf. [5]
- (ii) *Festivals hold a special place in our country's customs and traditions.* Discuss *any five* factors to be kept in mind while purchasing clothes for festive occasions. [5]
- (iii) For laundering her home furnishings, Uma wants to use a good quality detergent instead of a soap. Give *any five* reasons why she wants to use a detergent instead of a soap. [5]

Question 7

Write short notes on the following:

- (i) Street play and its importance [5]
- (ii) Impact of women's empowerment in today's world [5]
- (iii) Sanitation and safety measures in the kitchen [5]

Question 8

- (i) List *any five* salient features of PM – JAY. [5]
- (ii) Ali opened a new car showroom. He plans to expand his business across the country. Suggest *any five* points he should keep in mind while designing a brochure for his showroom. [5]
- (iii) *A new study conducted by researchers of International Institute for Population Sciences and other institutions shows air pollution in India poses a significant threat to human health, leading to a substantial rise in mortality observed for all age groups in districts where PM2.5 levels exceed the acceptable limit under National Ambient Air Quality Standard.* [5]

— TOI, August 27, 2024

With reference to the above finding, answer the questions given below:

- (a) What is meant by mortality?
- (b) List *any two* effects of pollution on mortality.
- (c) Suggest *any two* ways of curbing the effect of pollution on human population.

HOME SCIENCE

Maximum Marks: 100

Time allowed: Two hours

Answers to this Paper must be written on the paper provided separately.

*You will **not** be allowed to write during the first 15 minutes.*

This time is to be spent in reading the question paper.

The time given at the head of this Paper is the time allowed for writing the answers.

*Attempt **all** questions from **Section A** and **any four** questions from **Section B**.*

The intended marks for questions or parts of questions are given in brackets[].

SECTION A (40 Marks)

*(Attempt **all** questions from this **Section**.)*

Question 1

[20]

Choose the correct answers to the questions from the given options.

(Do not copy the questions, write the correct answers only.)

- (i) A wise guide to have an overall view of family income and expenses:
- (a) Insurance Policy
 - (b) Budgeting
 - (c) Bank Account
 - (d) Saving
- (ii) A work triangle is necessary to improve the _____ of the kitchen.
- (a) ventilation
 - (b) functionality
 - (c) size
 - (d) aspect

This paper consists of 8 printed pages.

T24 681

© Copyright reserved.

Turn Over

- (iii) A significant stage or an event in the development of an individual:
- (a) Heredity
 - (b) Growth
 - (c) Puberty
 - (d) Milestone
- (iv) The areas of cognitive development of a 13-year child focus on:
- (a) ideas of cause and effect
 - (b) logical thinking
 - (c) symbolical words
 - (d) object permanence
- (v) Pull or strip kitchens are:
- 1. Where work centres are placed in a row.
 - 2. Work counters are on both sides.
 - 3. No work triangle really exists.
 - 4. Three work centres are on adjacent wall.
- (a) 1 and 2
 - (b) 1 and 3
 - (c) 2 and 3
 - (d) 3 and 4
- (vi) Rohit cannot visualize letters, has difficulty with basic sentence structure and poor grammatical awareness. Identify his disability:
- (a) Dyscalculia
 - (b) Dyslexia
 - (c) ADHD
 - (d) Dysgraphia

- (vii) Which of the following would help a small room appear larger?
- (a) Using dark colour curtains and draperies
 - (b) Using curtains and draperies with large patterns
 - (c) Using curtains and draperies that blend with wall colour
 - (d) Using heavy textured curtains and draperies
- (viii) Example of a hygroscopic substance:
- (a) Oil
 - (b) Cumin
 - (c) Turmeric
 - (d) Salt
- (ix) A form of theatrical performance:
- (a) Exhibition
 - (b) Conference
 - (c) Street play
 - (d) Seminar
- (x) Clothes suitable for summer are:
- (a) dark coloured clothes
 - (b) cool coloured clothes
 - (c) light and cool coloured clothes
 - (d) dashing and bright coloured clothes
- (xi) Rapid and large increase in the numbers of a particular species is termed as:
- (a) Endangerment
 - (b) Sex ratio
 - (c) Population Explosion
 - (d) Mortality

- (xii) **Assertion (A):** Cotton is ironed at 400° F.
Reason (R): Cotton is a natural fibre made of cellulose which possess good heat resistance properties.
- (a) A is true but R is false
 - (b) Both A and R are not true
 - (c) A and R are true and R is the reasoning for A
 - (d) Both A and R true but R is not the reasoning for A
- (xiii) Ironing temperature for woollen fabrics is:
- (a) 200°F
 - (b) 100°F
 - (c) 400°F
 - (d) 150°F
- (xiv) Only _____ soaps are used to wash silk garments.
- (a) acidic
 - (b) neutral
 - (c) medicated
 - (d) glycerin
- (xv) MNREGA 2005 focuses:
- (a) to improve women's learning capacity
 - (b) to deliver primary health care services
 - (c) to improve the livelihood and security in rural areas
 - (d) to prevent the degradation of purity of environment

(xvi) Choose the correct pair:

- | | |
|--------------------|---------------------------|
| A. Sun drying | 1. Potatoes, Onions, Yams |
| B. Convenience | 2. Rasin, chips, papad |
| C. Semi-perishable | 3. Meat, fish, chicken |
| D. Perishable | 4. Peas, Jam, Jellies |

(a) A-2, B-4, C-1, D-3

(b) A-2, B-3, C-1, D-4

(c) A-1, B-2, C-3, D-4

(d) A-3, B-1, C-4, D-2

(xvii) Audio visual aid commonly found in the village is called a:

- (a) Brochure
- (b) Nukkad natak
- (c) Slide show
- (d) Flyers

(xviii) A good kitchen should have the following features:

- (a) dark coloured interior
- (b) have no work triangle
- (c) well-ventilated and well lit
- (d) have a western aspect

(xix) Storage places in the kitchen should be:

- (a) damp
- (b) dry
- (c) clean and dry
- (d) unhygienic and damp

- (xx) Roughage plays an important role in our diet. It helps to:
- (a) promote brain development
 - (b) supply essential fatty acid
 - (c) repair tissues in the body
 - (d) prevent constipation

Question 2

Answer all the questions:

- (i) List *any two* importance of making a family budget. [2]
- (ii) State *any two* factors affecting the size of a kitchen. [2]
- (iii) Define the term language development. [2]
- (iv) Name *any two* types of learning disabilities among children. [2]
- (v) State the importance of milk and its products in our diet. [2]
- (vi) Why is it important to preserve meat and its products properly? [2]
- (vii) Name *any two* qualities a consumer seeks while selecting a fabric. [2]
- (viii) Radha is a nurse who hand washes her uniform every day. Give *two* reasons for Radha soaking her uniform before going through the other process of laundering. [2]
- (ix) State the difference between female infanticide and female foeticide. [2]
- (x) List *any two* objectives of DWCRA. [2]

SECTION B (60 Marks)

(Answer **any four** questions from this **Section**.)

Question 3

- (i) Explain *any five* steps of making a budget. [5]
- (ii) List *any five* uses of a carpet in a home. [5]
- (iii) Mention *any five* uses of a modular kitchen. [5]

Question 4

- (i) State *any five* changes that occur in the social behavior of an 8-year-old child. [5]
- (ii) List *any five* symptoms of learning disabilities seen in a 10-year-old child. [5]
- (iii) Discuss the role of a peer group in the development of a child. [5]

Question 5

- (i) Enumerate *any five* uses of preserving food at home. [5]
- (ii) How does pickling help to preserve fruits, vegetables and meat? [5]
- (iii) Discuss *any five* factors affecting meal planning. [5]

Question 6

- (i) Explain *any five* steps incorporated while laundering a polyester sportswear. [5]
- (ii) State *any five* benefits of purchasing readymade garments. [5]
- (iii) List *any five* benefits of using starch in laundering of clothes. [5]

Question 7

- (i) List *any five* objectives of UJJWALA YOJANA. [5]
- (ii) Discuss *any five* factors of gender discrimination. [5]
- (iii) List *any five* guidelines of making a poster. [5]

Question 8

- (i) List *any five* advantages of using convenience food. [5]
- (ii) Explain the term child abuse. List *any four* symptoms seen in children who have been abused. [5]
- (iii) Amit is in the fifth grade who is easily distracted in class and is unable to pay constant attention. [5]
 - (a) Name the learning disability Amit may be suffering from.
 - (b) List *any other four* signs and symptoms of this learning disability.

HOME SCIENCE

Maximum Marks: 100

Time allowed: Two hours

Answers to this Paper must be written on the paper provided separately.

*You will **not** be allowed to write during the first 15 minutes.*

This time is to be spent in reading the question paper.

The time given at the head of this Paper is the time allowed for writing the answers.

*Attempt **all** questions from **Section A** and **any four** questions from **Section B**.*

The intended marks for questions or parts of questions are given in brackets[].

SECTION A (40 Marks)

*(Attempt **all** questions from this **Section**.)*

Question 1

[20]

Choose the correct answers to the questions from the given options.

(Do not copy the questions, write the correct answers only.)

- (i) A type of budget where expenditure exceeds income:
- (a) Balanced
 - (b) Deficit
 - (c) Surplus
 - (d) Excess

This paper consists of 7 printed pages and 1 blank page.

T23 681

© Copyright reserved.

Turn Over

- (ii) The mixing centre is also known as:
- (a) Preparation Centre
 - (b) Cooking Centre
 - (c) Sink Centre
 - (d) Storage Centre
- (iii) A type of kitchen which is usually found in small apartments and occupying less space:
- (a) L shaped kitchen
 - (b) Pullman kitchen
 - (c) Corridor kitchen
 - (d) Island kitchen
- (iv) The advantage of modular kitchen is:
- (a) it is flexible
 - (b) it is prefabricated
 - (c) ever changing trends
 - (d) cannot be repaired by any local contractors
- (v) _____ is a disorder that causes children to lose focus on a task very easily.
- (a) Dyscalculia
 - (b) Dysgraphia
 - (c) ADHD
 - (d) Dyslexia

- (vi) Development is related to:
- (a) Progressive changes
 - (b) Unfolding traits
 - (c) Quantitative changes
 - (d) Changes due to heredity
- (vii) Balanced diet:
- (a) decreases muscle performance
 - (b) increases body immunity
 - (c) reduces capacity to work
 - (d) retards growth and development of body
- (viii) A meal cooked at home:
- (a) provides variety
 - (b) is cheaper and healthier
 - (c) is exotic
 - (d) is tasty and laden with fats
- (ix) Optical brighteners make garments appear _____.
- (a) cleaner
 - (b) whiter
 - (c) crisper
 - (d) smoother
- (x) The best flooring option for a kitchen is:
- (a) Marble tiles
 - (b) Carpet tiles
 - (c) Wooden tiles
 - (d) Rubber tiles

- (xi) Neutral soaps are applied on:
- (a) jute
 - (b) cotton
 - (c) silk
 - (d) linen
- (xii) Identify which is not an example of sundried product:
- (a) Semolina
 - (b) Cashew Nuts
 - (c) Tomato Sauce
 - (d) Raisins
- (xiii) Clothes chosen for furnishing and curtain are:
- (a) Thick or rough textured
 - (b) Soft textured fabrics
 - (c) Synthetic fabrics
 - (d) Thin and smooth fabrics
- (xiv) Rinsing of clothes refers to:
- (a) Boiling of clothes
 - (b) Washing in plenty of water
 - (c) Moistening and spreading clothes on grass
 - (d) Application of pressure on clothes
- (xv) Mortality refers to:
- (a) level of health
 - (b) increase in the number of species
 - (c) empowerment of girls
 - (d) risk of death

- (xvi) MNREGA is a scheme applied:
- (a) to deliver health care facilities
 - (b) to improve the livelihood in rural areas
 - (c) to ensure equitable share of girl child in family savings
 - (d) to improve child sex ratio
- (xvii) The disadvantage of a poster is:
- (a) available to the common people
 - (b) cannot be targeted to illiterate people
 - (c) spreads awareness on any issue
 - (d) helps in promotion of products
- (xviii) _____ is not only a form of entertainment but they are also involved in creating special awareness.
- (a) slogans
 - (b) street plays
 - (c) posters
 - (d) flyers
- (xix) _____ fabrics should be ironed when damp.
- (a) wool
 - (b) synthetic
 - (c) cotton
 - (d) silk
- (xx) Eggs are best kept in _____.
- (a) warm place
 - (b) humid place
 - (c) cool place
 - (d) sunny place

Question 2

Answer all the questions:

- (i) List *any two* objectives of home furnishing. [2]
- (ii) What do you mean by work triangle? [2]
- (iii) State *any two* characteristics of pre-gang age. [2]
- (iv) List *any two* characteristics seen in a dyslexic child. [2]
- (v) Define the term *food group*. [2]
- (vi) List *any two* advantages of convenience food. [2]
- (vii) What do you mean by readymade garments? [2]
- (viii) State *any two* precautionary measures to be followed while drying woolen garments. [2]
- (ix) List *any two* reasons for child labour in our country. [2]
- (x) State *any two* roles of a poster as a means of communication. [2]

SECTION B (60 Marks)

(Answer **any four** questions from this **Section**.)

Question 3

- (i) Explain *any five* benefits of making a budget. [5]
- (ii) State *any five* important features of the cooking centre in the kitchen. [5]
- (iii) List *any five* points to be kept in mind while selecting curtains and draperies. [5]

Question 4

- (i) Discuss the role of parents in handling children with learning disabilities. [5]
- (ii) Explain *any five* characteristics of gang age among middle childhood. [5]
- (iii) State *any five* learning disabilities observed in school going children. [5]

Question 5

- (i) Discuss the nutritional contribution of the five food groups. [5]
- (ii) Mention *any five* ways of maintaining hygiene while handling food. [5]
- (iii) How do sugar and salt contribute to the preservation of food? [5]

Question 6

- (i) List *any five* considerations to be kept in mind while selecting clothes, within a budget and for an occasion. [5]
- (ii) Explain *any five* steps incorporated while laundering a white bedsheet. [5]
- (iii) State *any five* precautionary measures to be followed during the bluing process in laundry. [5]

Question 7

- (i) Explain *any five* features of the DWCR Act. [5]
- (ii) Discuss *any two* ecological problems that the world is facing. [5]
- (iii) Suggest *any five* guidelines to design a pamphlet. [5]

Question 8

Write short notes on: (*Any five points*)

- (i) Types of kitchens. [5]
- (ii) Storage of semi perishable products. [5]
- (iii) Types of puppet shows. [5]




Prepare for ICSE CLASS 10
Free Resources

SCAN QR CODE Now




History/Civics




Geography




Maths



Physics



Chemistry



Biology



Hindi



Physical
Education




Computer
Applications





Prepare for ICSE CLASS 10
Free Resources


SCAN QR CODE Now




Economics




Commercial
Studies



French




Robotics & AI




Home Science



EVS



Marathi



Gujarati



Odiya



Scan QR code for Free Access to 500+ Prelim Papers across 20 subjects

